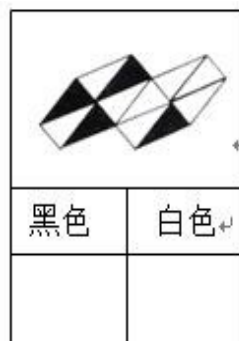
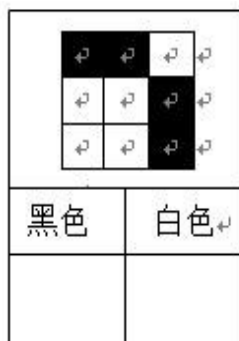
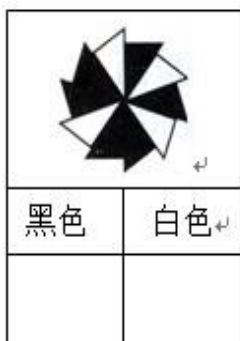
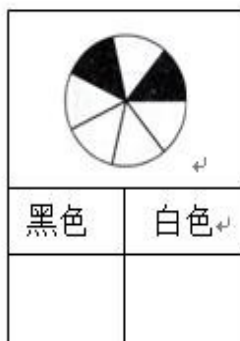


1、用分数表示黑色、白色部分在整个图形中所占的大小。



答案: $\frac{2}{7}$ $\frac{5}{7}$ $\frac{6}{10}$ $\frac{4}{10}$ $\frac{4}{9}$ $\frac{5}{9}$ $\frac{4}{12}$ $\frac{8}{12}$