

# 第 5 单元 6 ~ 10 的认识和加减法

## 第 1 课时 6 和 7 的认识

一年级数学上册 (RJ)



学习单 同步作业课件

 优翼学习单

kǒu suàn chuǎng guān

1. 口算闯关。

$1 + 2 = \square$

$2 + 1 = \square$

$3 + 2 = \square$

$2 + 3 = \square$

$2 - 1 = \square$

$2 - 2 = \square$

$3 - 1 = \square$

$3 - 2 = \square$

$2 + 0 = \square$

$0 + 1 = \square$

$5 - 5 = \square$

$5 - 0 = \square$

tào quān yóu xì

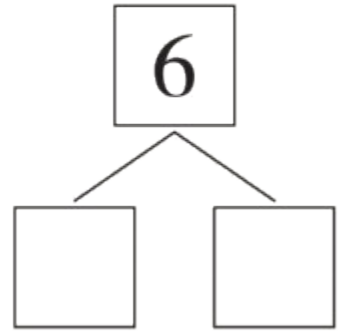
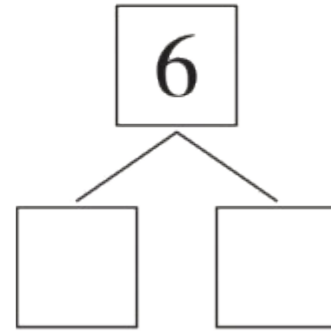
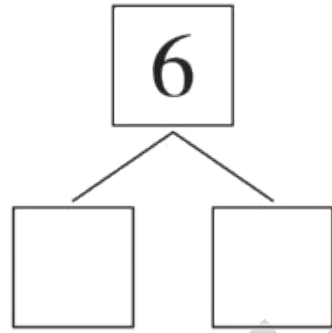
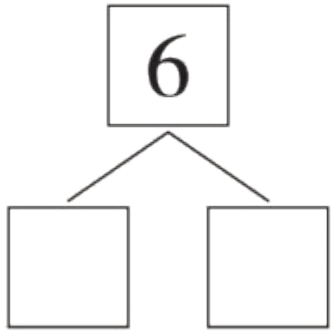
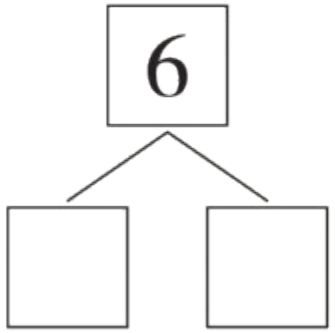
## 2. 【趣味探究】套圈游戏！




(1) 数一数, 图中有  个小朋友, 可以画 ○○○○○○ 来表示; 图

中有  个圈, 可以画(  )来表示。

(2) 把所有小朋友分成两组, 可以怎样分呢?



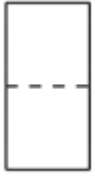
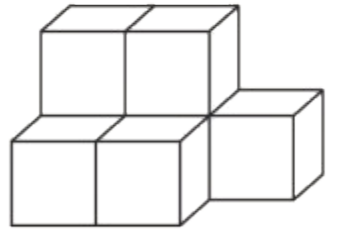
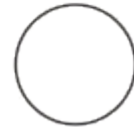
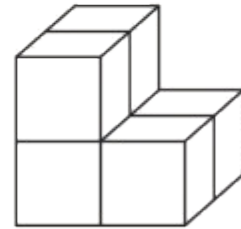
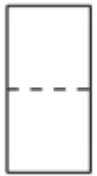


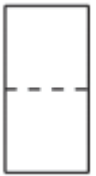

(3) 从前往后数, 你能把第6个小朋友圈出来吗?



# 优翼巩固单

shǔ yi shǔ xiě yi xiě bǐ yi bǐ

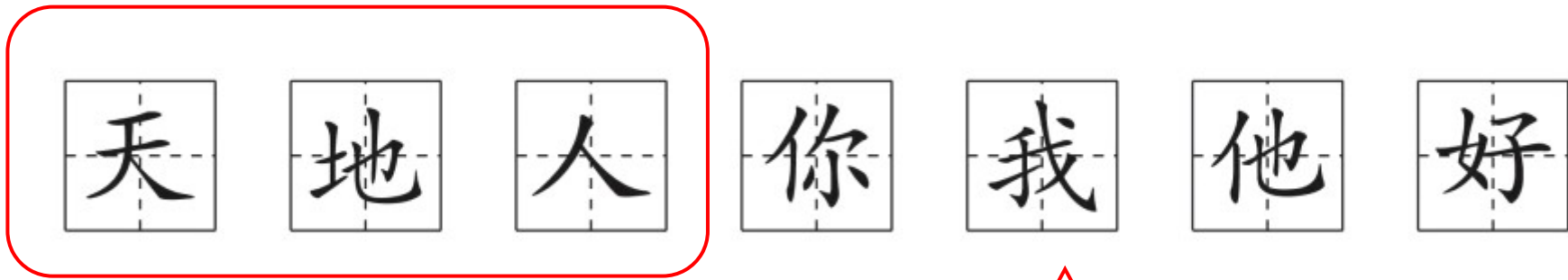
1. 数一数，写一写，比一比。 [★]



学习单

shǔ kǎ piàn

## 2. 数卡片。 [★ ★]






(1) 一共有( )张卡片。从左边数, **他** 是第( )张。

(2) 从右边数, 在第3张卡片下面画“△”; 把左边3张卡片圈起来。

měi gè huā píng lǐ yào chā zhī huā fēn bié hái quē jǐ zhī tián

3. 每个花瓶里要插7枝花，分别还缺几枝？填

zài lǐ 。 [ ★ ★ ]

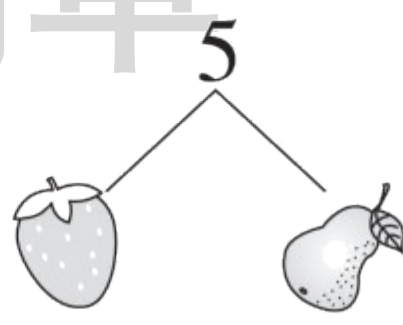
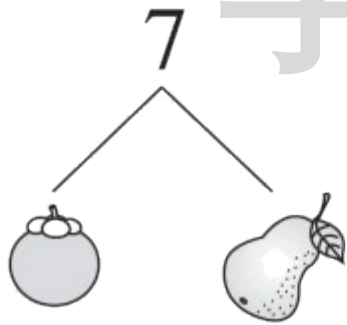
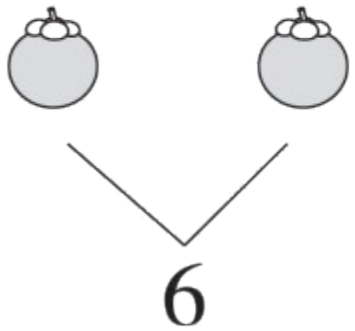



学习单


我知道你是数学小天才，来试一试吧！


xiǎng yi xiǎng měi zhǒng shuǐ guǒ gè dài biǎo jǐ

4. 想一想，每种水果各代表几？ [★ ★ ★]



 = ( )

 = ( )

 = ( )

学习单



关注“优翼丛书”小程序

更多优质好课等你来

更多教学资源，敬请关注 [www.youyi100.com](http://www.youyi100.com)