

《优干线》人教版数学一下作业 PPT



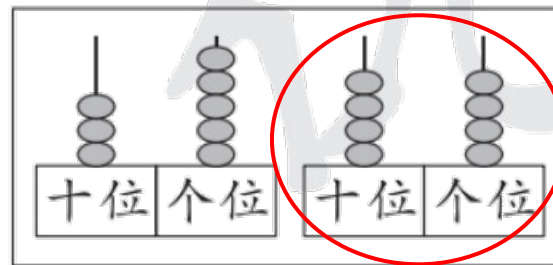
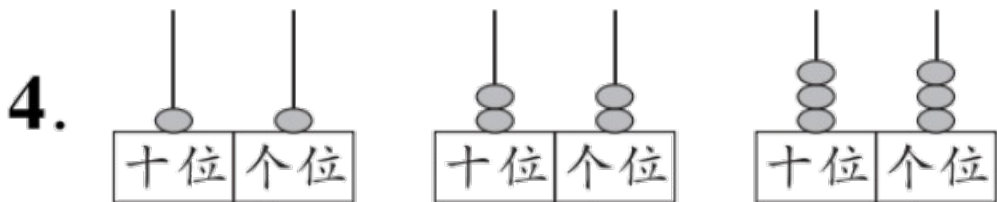

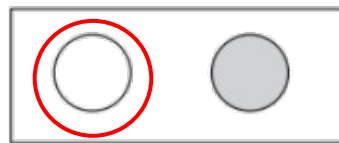
更多教学资源内容，敬请关注 www.youyi100.com

第七单元学业质量评价



jiē zhe yīng gāi bǎi shén me qǐng nǐ quān chū lái

一、接着应该摆什么？请你圈出来。



àn guī lǜ jiē zhe huà

二、按规律接着画。



yǒu guī lǜ de tú chū nǐ xǐ huan de yán sè

三、有规律地涂出你喜欢的颜色。



优干线

nǎ yì háng de guī lǜ yǔ qí tā sān háng bù yí yàng huà

四、哪一行的规律与其他三行不一样？画“×”。

1.

10	15	20	25
35	40	45	50
80	85	90	95
12	14	16	18

()

()

()

()

2.

2	4	6	8
10	12	14	16
17	18	19	20
22	24	26	28

()

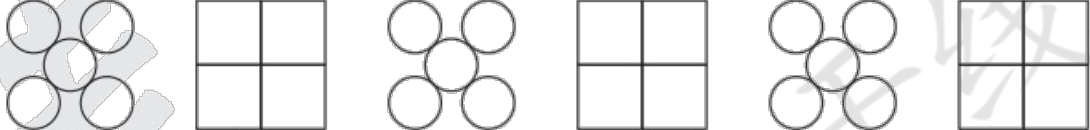
()


()

()

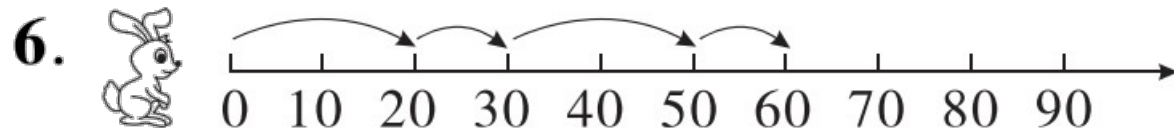
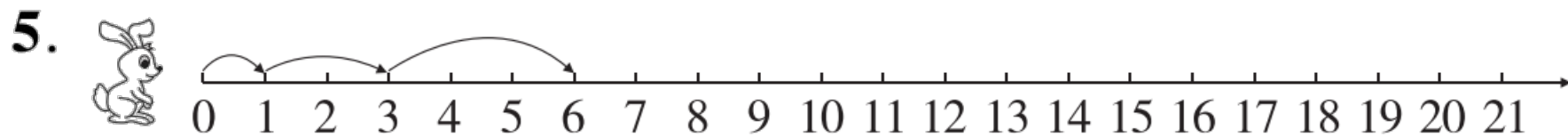
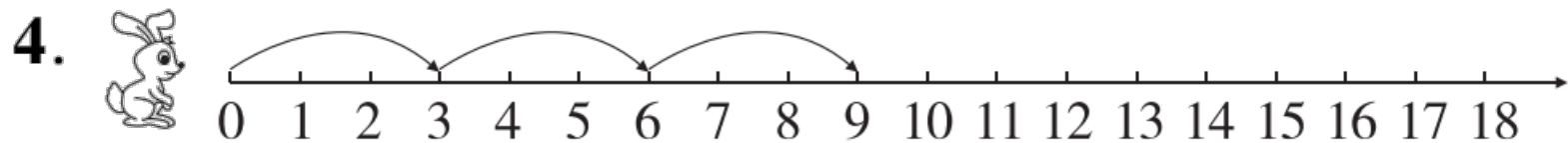
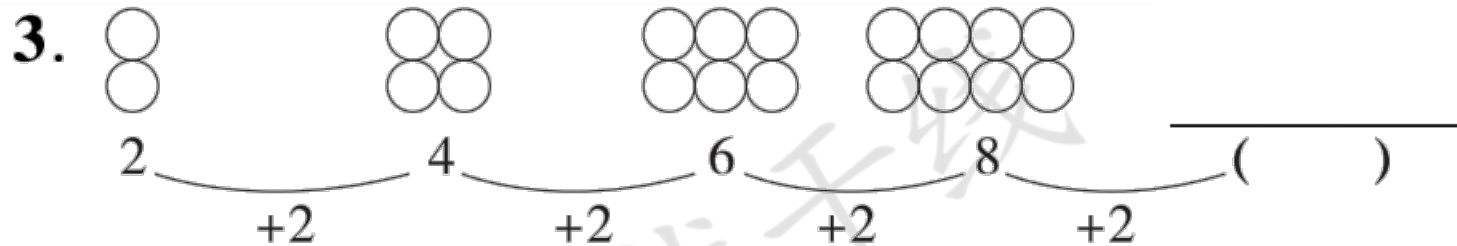
huà yì huà tián yì tián

五、画一画，填一填。

1. 
 5 4 5 4 5 4 () ()










2. 
 8 7 6 5 ()
 -1 -1 -1 -1













yòng gè huà diào yí gè shù ràng xiǎo dòng wù yòu biān de shù pái liè de
 六、用“\”各划掉一个数，让小动物右边的数排列得

yǒu guī lǜ
 有规律。

1.         

2.        

3.       

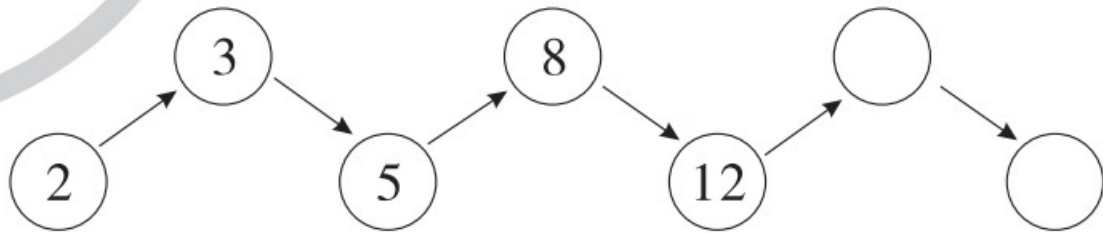
àn guī lǜ tián shù

七、按规律填数。

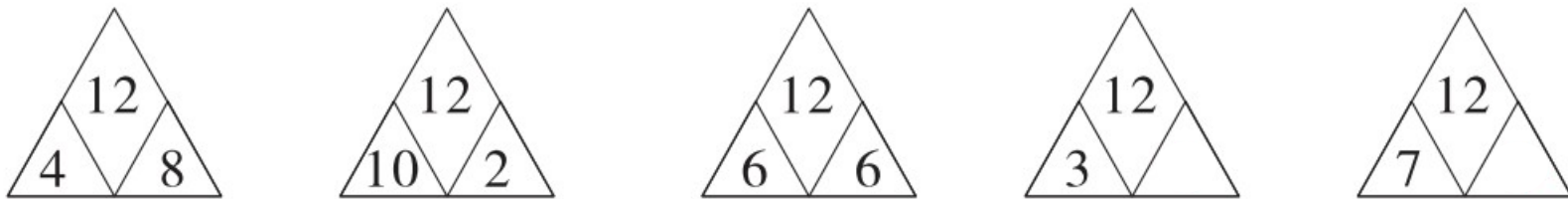
1. 4 7 10 13 _____

2. 80 75 70 65 _____


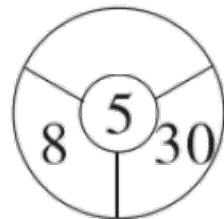



3.



4.



5.



6.

3	6
4	7

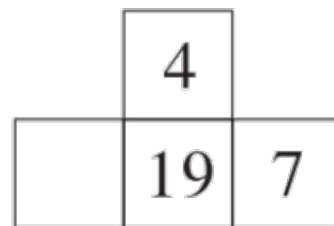
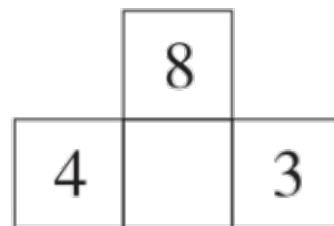
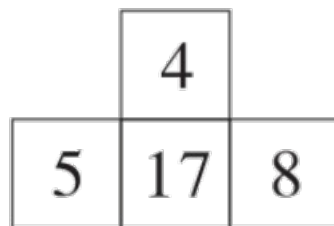
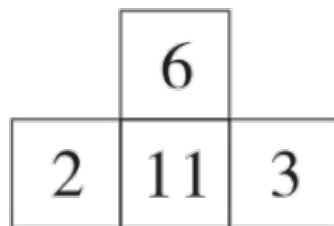
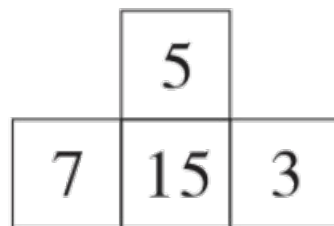
9	12
10	13

14	17
15	18

10	
	14

15	
	19

7.



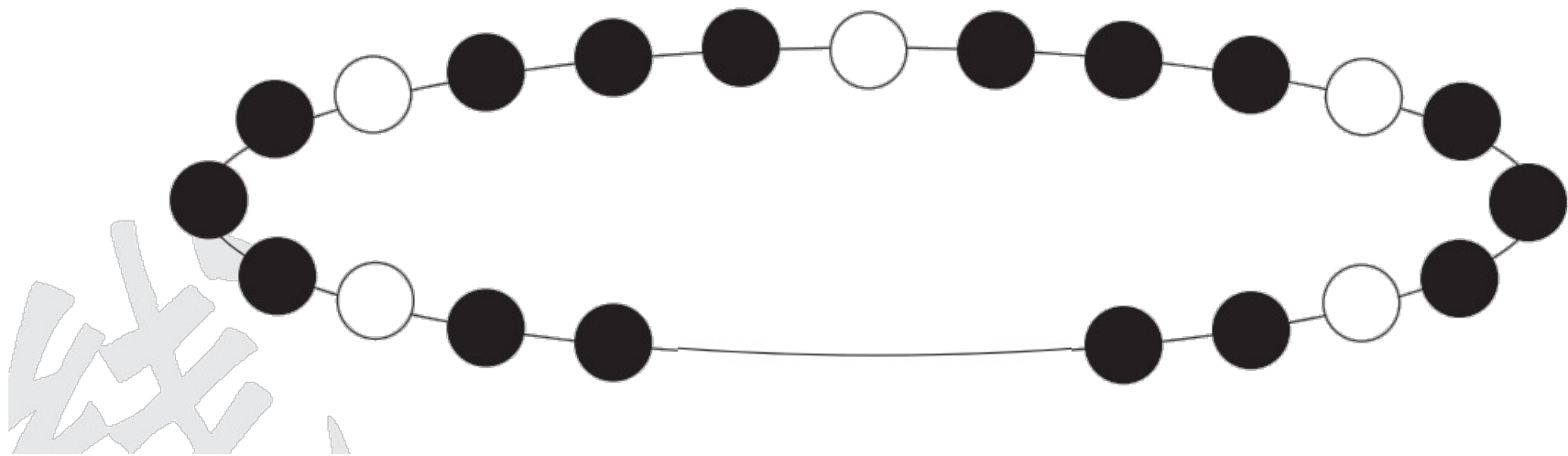
cāi yi cāi

八、猜一猜。


1. 下面掉了哪两个汉字卡片？请在合适的位置加上箭头，并在下面写出来。

好	好	学	习	好	好	学	习	好	习	好	好	学	习
---	---	---	---	---	---	---	---	---	---	---	---	---	---

2. 漂亮的手链(liàn)掉了3颗珠子,你能按规律把这3颗珠子画上吗?







3. 里面有()个●, ()个○。



挑战题。

zǐ xì xiǎng yi xiǎng zài kòng bái chù tián shàng shì dàng de tú xíng
 仔 细 想 一 想 ， 在 空 白 处 填 上 适 当 的 图 形 。



优干线



关注“优翼丛书”小程序

更多优质好课等你来



更多教学资源，敬请关注www.youyi100.com