

综合练习(二)

1. 在○里填上“+”或“-”。

$9 \bigcirc 8 = 17$ $16 \bigcirc 3 = 13$ $15 \bigcirc 5 = 10$


$6 \bigcirc 5 = 1$ $8 \bigcirc 8 = 16$ $13 \bigcirc 3 = 16$

$0 \bigcirc 14 = 14$ $9 \bigcirc 4 = 5$ $12 \bigcirc 2 = 14$

$7 \bigcirc 6 = 13 \bigcirc 0$ $8 \bigcirc 4 = 5 \bigcirc 1$


$4 \bigcirc 8 = 6 \bigcirc 6$ $18 \bigcirc 7 = 6 \bigcirc 5$

2. 圈一圈,填一填。



$4 + 13 = \square$

Diagram: A number line starting at 4, with a bracket from 4 to 13. A square box is above the 13, and another square box is below the 4. A vertical line connects the two boxes, and a horizontal line branches from the vertical line to the 13, forming a partial addition tree.



$\square \bigcirc \square = \square$

Diagram: A number line starting at a square box, with a bracket from that box to another square box. A square box is above the second box, and another square box is below the first box. A vertical line connects the two boxes, and a horizontal line branches from the vertical line to the second box, forming a partial subtraction tree.

3. 在□里填上合适的数。

$8 + 7 = 9 + \square + \square = \square$ $5 + 6 = 18 - \square - \square = \square$

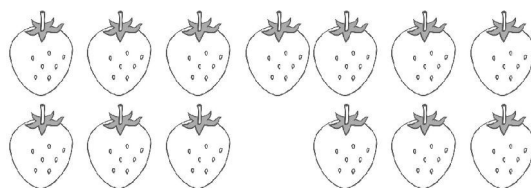
$7 + 6 = 19 - \square + \square = \square$ $7 + 7 = 7 + \square - \square = \square$

$12 - 9 = 4 - \square - \square = \square$ $6 + 9 = 4 + \square + \square = \square$

4. 照样子,涂一涂,填一填。



$2 + 7 = \square$ $7 + 2 = \square$ $9 - 2 = \square$ $9 - 7 = \square$



$$\square + \square = \square$$

$$\square + \square = \square$$

$$\square - \square = \square$$

$$\square - \square = \square$$

参考答案

1. + - - - + + + - + + -(或+) - - + + - +

2. 17 6 7 10 8+6=14 2 4 10

3. 1 5 15 6 1 11 9 3 13 9 2 14

1 0 3 10 1 15 (部分答案均不唯一)

4. 9 7 2 7+6=13 6+7=13 13-7=6 13-6=7