

第一课时 对称图形的认识

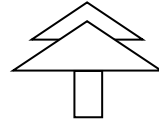
1、判断下面哪些图形是轴对称图形，是的在括号里画“√”。



() ()



() ()



2、画出下面图形的对称轴。

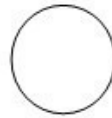
3、长方形有几条对称轴？正方形呢？圆呢？请你画一画，填一填。



4. () 条



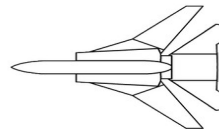
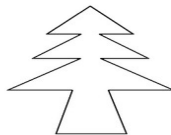
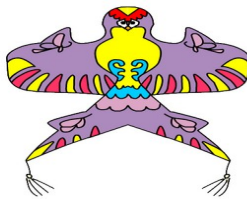
() 条



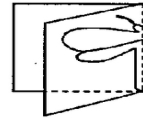
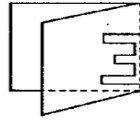
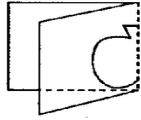
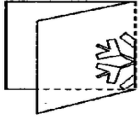
() 条



5、下面的图形是对称的吗？如果是请画出对称轴。




6、展开后像什么？连一连。



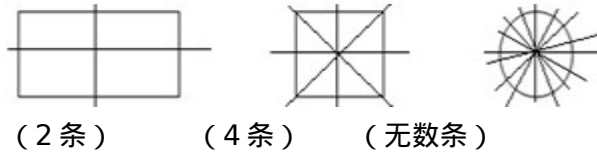
答案：

1、√ X √ √

2、



3、




(2条)


(4条)

(无数条)

4、



5、



6、

