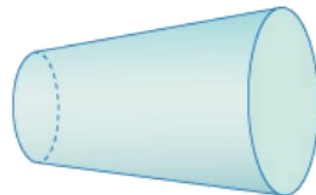
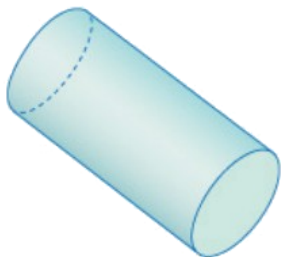
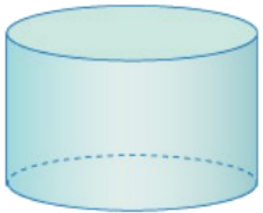


练习三

(选自教材 P19 练习三)

1. 下面的图形哪些是圆柱？在（ ）里面画“√”。



(√)

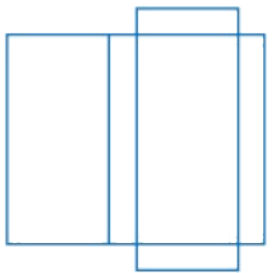
()

(√)

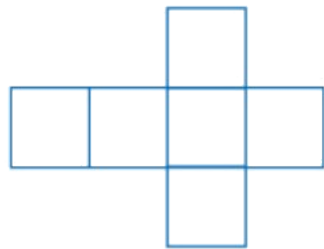
()

(√)

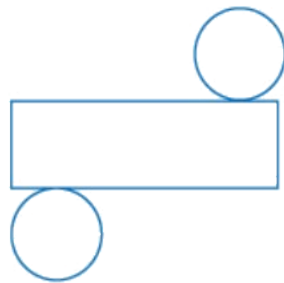
2. 折一折或卷一卷，想一想：能得到什么立体图形？写在（ ）里。



(**长方体**)

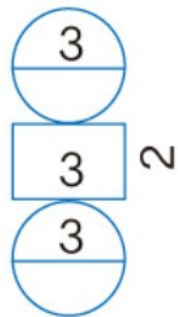
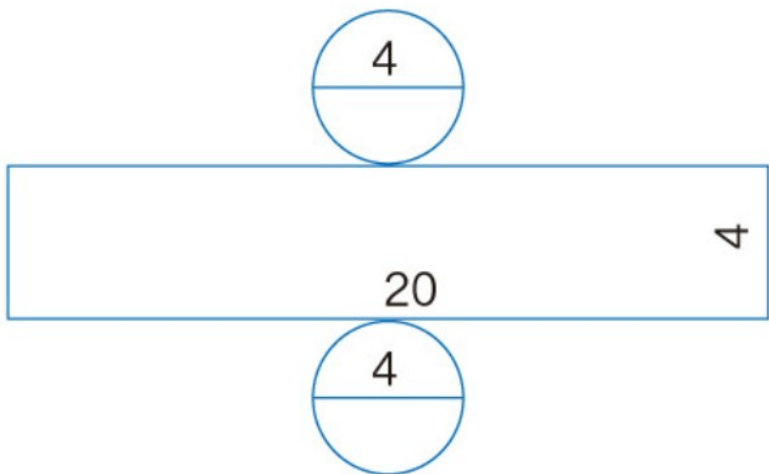
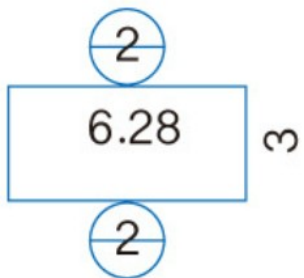


(**正方体**)

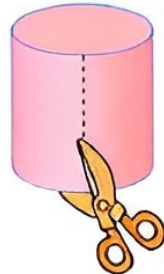
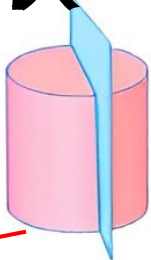
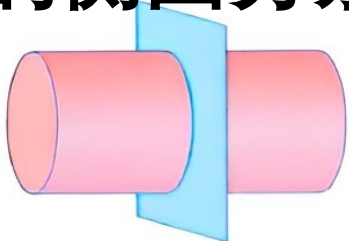


(**圆柱**)

3. 下面哪个图形是圆柱的展开图（单位：cm）？



4. 如下图，上排图中切完后的截面或剪完后展开的侧面分别是什么形状？请与下排图连一连。



5. 把一张长方形的纸横着或竖着卷起来，可以卷成什么形状？

